

## CISD Grade 2 Math Unit 04: Number Lines

Some questions (c) 2012 by CSCOPE.

- 1 Carson likes bubble gum.  
A pack of gum costs 60¢ .  
Which set of coins is equal to 60¢ ?

A



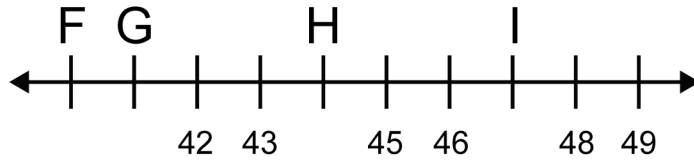
B



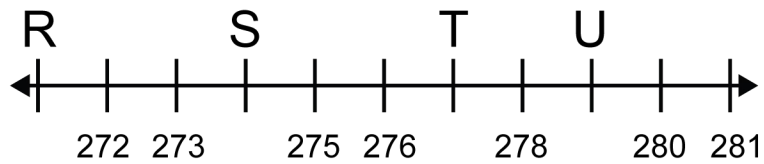
C



- 2 Look at the number line.  
What number belongs where you see the letter F?

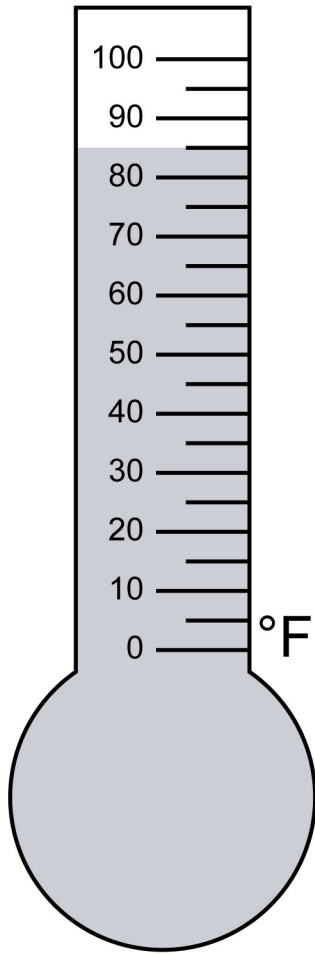


- A 38  
B 40  
C 44
- 3 Look at the number line.  
What number belongs where you see the letter T?



- A 276  
B 277  
C 280

- 4 Angie wanted to play in the back yard. She looked at the thermometer to see what the temperature was outside. What is the temperature?



- A 70°F
- B 85°F
- C 90°F

- 5 Trent has soccer practice at 4:45. Which clock shows the time that soccer practice starts?

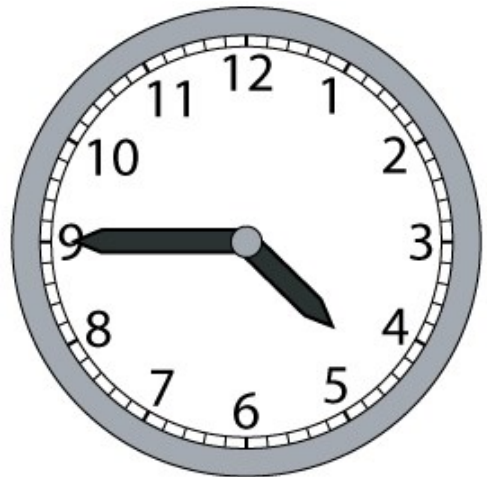
A



B



C



- 6 The clock below shows the time that Julia gets out of school. What time does this clock show?



- A 1:30
- B 2:30
- C 3:30

7



About how long does it take most people to brush their teeth?

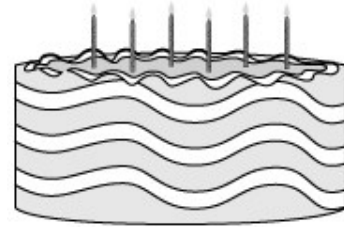
- A one second
- B one minute
- C one hour

- 8 We are learning to clap to the beat in music. About how long does it take to clap once?



- A one second
- B one minute
- C one hour

- 9 Marsha made a cake for her mom's birthday. About how long does it take to bake a cake?



- A one second
- B one minute
- C one hour

10 Joseph's alarm goes off every day at the time shown on the digital clock.



Which analog clock below shows the same time as Joseph's digital clock?

**A**



**B**



**C**



- 11 Dylan wants to buy a snack after school. He has these coins in his pocket. Count the coins.

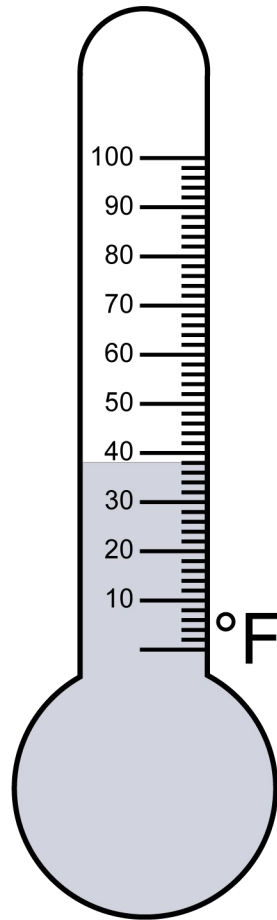


How much money does Dylan have?


\_\_\_\_\_ ¢



12 What is the temperature on this thermometer?



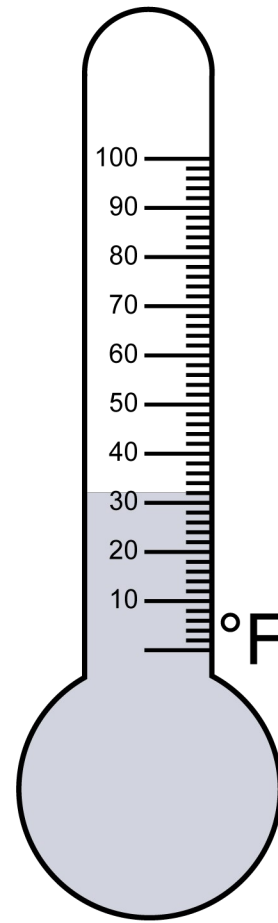
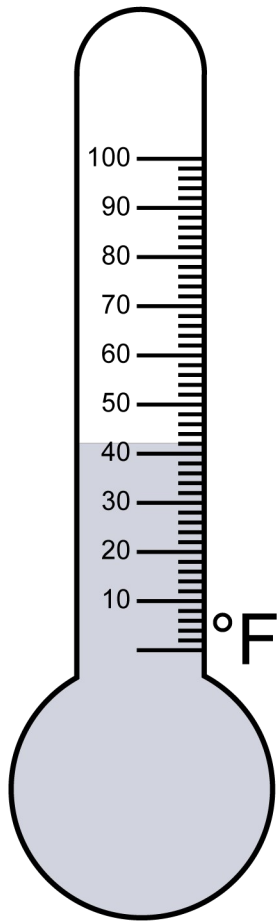
13 Amber emptied her coin purse out on the table.



How much money is shown?

\_\_\_\_\_

14 Water freezes at 32°F. Circle the thermometer that shows 32°F.



---

A large empty rectangular area for writing an answer, bounded by a horizontal line at the top and a vertical line on the left side.